

Counting to 20




Activity Booklet

Name: _____


Minibeast Hotels Counting to 20

How many minibeasts are in each hotel? Use the ten-frames to help you count the minibeasts. Then, write the total in the box.




A house-shaped ten-frame containing ladybugs. The first two columns are filled with ladybugs: 2 in the first row, 2 in the second, 2 in the third, 2 in the fourth, and 4 in the fifth. The last two columns are empty. A small box for the total is located above the house.

1	1		
1	1		
1	1		
1	1		
1	1	1	1




A house-shaped ten-frame containing beetles. The first two columns are filled with beetles: 2 in the first row, 2 in the second, 2 in the third, 2 in the fourth, and 2 in the fifth. The last two columns are empty. A small box for the total is located above the house.

1	1		
1	1		
1	1		
1	1		
1	1		



A house-shaped ten-frame containing caterpillars. The first two columns are filled with caterpillars: 2 in the first row, 2 in the second, 2 in the third, 2 in the fourth, and 4 in the fifth. The last two columns are empty. A small box for the total is located above the house.




1	1		
1	1		
1	1		
1	1		
1	1	1	1



A house-shaped ten-frame containing spiders. The first two columns are filled with spiders: 2 in the first row, 2 in the second, 2 in the third, 2 in the fourth, and 2 in the fifth. The last two columns are empty. A small box for the total is located above the house.

1	1		
1	1		
1	1		
1	1		
1	1		

Minibeast Hotels Counting to 20




Minibeast Hotels Counting to 20

The image shows four minibeast hotels arranged in a 2x2 grid. Each hotel is a wooden house with a gabled roof and a chimney. The windows are arranged in a 5x4 grid. The first hotel (top-left) contains 12 snails in its windows. The second hotel (top-right) contains 10 spiders. The third hotel (bottom-left) contains 20 ladybugs. The fourth hotel (bottom-right) contains 15 butterflies. Each hotel has a blank box next to it for the total count.

12	10	20	15
----	----	----	----

Teddy Bears' Picnic Counting to 20

The teddy bears are having a picnic. How many cookies does each teddy bear have? Count them carefully and write the answer in the box.



I have cookies.

I have cookies.

I have cookies.

I have cookies.


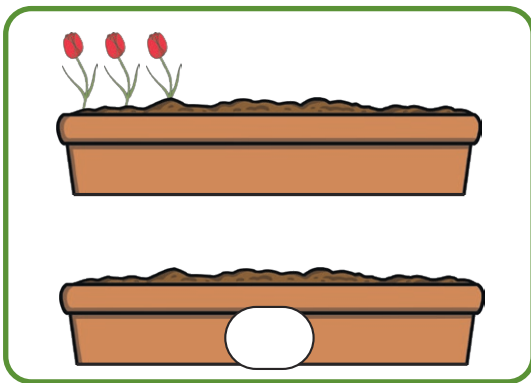
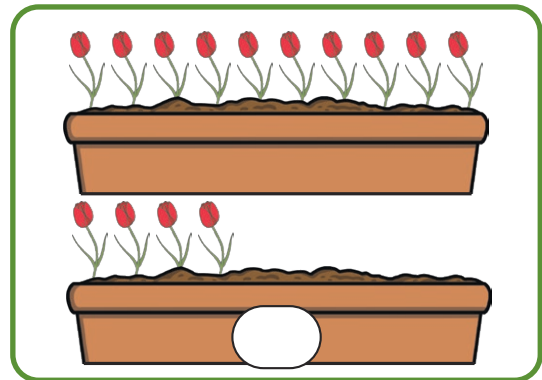
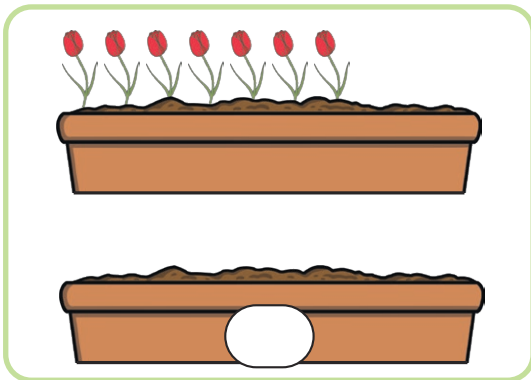
These teddy bears are asking for some cookies. Can you draw the correct number of cookies for each teddy bear?

I would like 15 cookies.

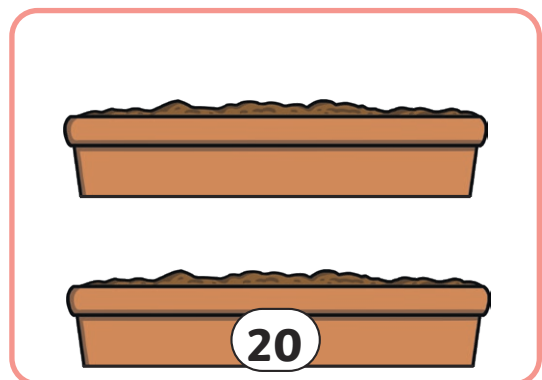
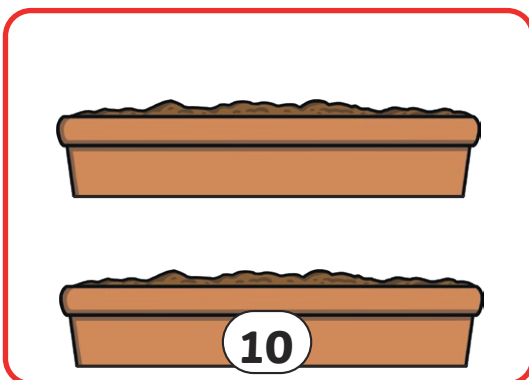
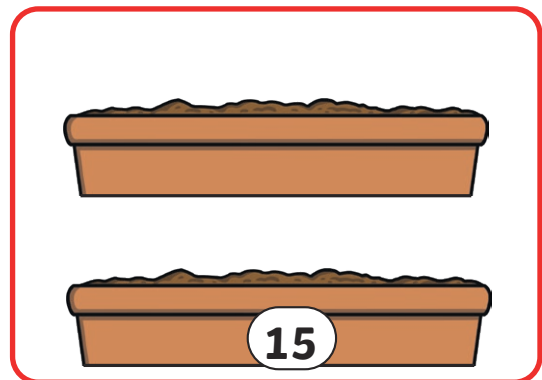
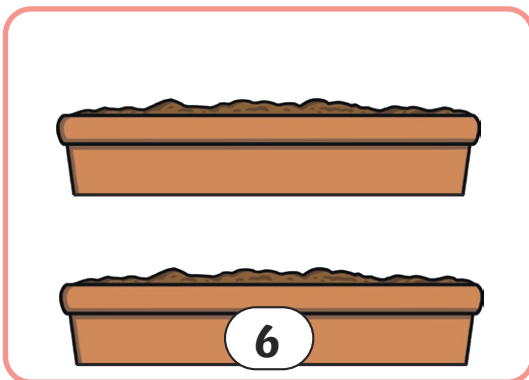
I would like 20 cookies.

Cherry's Flowerpots Counting to 20

Can you help me work out how many flowers are in my flowerpots?




Can you draw the correct number of flowers in my flowerpots?




Football Counting to 20




How many footballs can you count inside each goal? Count them carefully and write your total in the box.




I counted footballs.



I counted footballs.




I counted footballs.




I counted footballs.

The footballer has scored 13 goals. Can you draw 13 footballs in the goal?



Sandcastle Counting to 20



Suki Seagull is counting the sandcastles on the beach. How many sandcastles can you count? Count them carefully and write your total in the box.

I counted sandcastles.

I counted sandcastles.

I counted sandcastles.

I counted sandcastles.

Can you help Suki make more sandcastles? The shell tells you how many sandcastles to draw. Count them carefully to check you have drawn the right number of sandcastles.
